

Adı:  
Soyadı:



Matematik  
3/F Çalışma Kağıdı



Tarih  
...../...../2018

### Toplamı Tahmin Etme

İŞLEM	TAHİMİNİ SONUÇ	GERÇEK SONUÇ	KARŞILAŞTIRMA
$\begin{array}{r} 213 \\ +234 \\ \hline \end{array}$	$\begin{array}{r} 210 \\ +230 \\ \hline 440 \end{array}$	$\begin{array}{r} 213 \\ +234 \\ \hline 447 \end{array}$	Anadaki fark 7'dir.
$\begin{array}{r} 265 \\ +364 \\ \hline \end{array}$	$\begin{array}{r} ..... \\ +..... \\ \hline \end{array}$	$\begin{array}{r} ..... \\ +..... \\ \hline \end{array}$	
$\begin{array}{r} 607 \\ + 98 \\ \hline \end{array}$	$\begin{array}{r} ..... \\ +..... \\ \hline \end{array}$	$\begin{array}{r} ..... \\ +..... \\ \hline \end{array}$	

### Zihinden Toplama İşlemi

$\begin{array}{r} 27 \\ +14 \\ \hline \end{array}$	$\begin{array}{r} 20 + 7 \\ +10 + 4 \\ \hline 30 + 11 = 41 \end{array}$	$\begin{array}{r} 38 \\ +24 \\ \hline \end{array}$	$\begin{array}{r} ..... + ..... \\ + ..... + ..... \\ \hline ..... + ..... = ..... \end{array}$
--	---	--	---

$\begin{array}{r} 35 \\ +45 \\ \hline \end{array}$	$\begin{array}{r} ..... + ..... \\ + ..... + ..... \\ \hline ..... + ..... = ..... \end{array}$	$\begin{array}{r} 24 \\ +26 \\ \hline \end{array}$	$\begin{array}{r} ..... + ..... \\ + ..... + ..... \\ \hline ..... + ..... = ..... \end{array}$
--	---	--	---

$\begin{array}{r} 38 \\ +42 \\ \hline \end{array}$	$\begin{array}{r} ..... + ..... \\ + ..... + ..... \\ \hline ..... + ..... = ..... \end{array}$	$\begin{array}{r} 23 \\ +55 \\ \hline \end{array}$	$\begin{array}{r} ..... + ..... \\ + ..... + ..... \\ \hline ..... + ..... = ..... \end{array}$
--	---	--	---

### Verilmeyen Toplama İşlemi

$\begin{array}{r} 723 \\ + \square \\ \hline 987 \end{array}$	$\begin{array}{r} \square \\ +471 \\ \hline 985 \end{array}$	$\begin{array}{r} 666 \\ + \square \\ \hline 877 \end{array}$	$\begin{array}{r} \square \\ +358 \\ \hline 969 \end{array}$
$\begin{array}{r} 512 \\ + \square \\ \hline 936 \end{array}$	$\begin{array}{r} 208 \\ + \square \\ \hline 658 \end{array}$	$\begin{array}{r} 411 \\ + \square \\ \hline 733 \end{array}$	$\begin{array}{r} \square \\ +143 \\ \hline 265 \end{array}$

### Yan Yana Çıkarma İşlemi

$492 - 251 = \square$	$763 - 431 = \square$
$564 - 302 = \square$	$985 - 463 = \square$
$857 - 246 = \square$	$632 - 421 = \square$
$480 - 350 = \square$	$621 - 211 = \square$
$687 - 172 = \square$	$549 - 345 = \square$
$752 - 640 = \square$	$968 - 257 = \square$

Aşağıdaki çıkarma işlemlerini örnekteki gibi yapalım.

$\begin{array}{r} \textcircled{0} \textcircled{8} \textcircled{18} \\ 598 \\ -279 \\ \hline 319 \end{array}$	$\begin{array}{r} \textcircled{0} \textcircled{0} \textcircled{0} \\ 813 \\ -497 \\ \hline \end{array}$	$\begin{array}{r} \textcircled{0} \textcircled{0} \textcircled{0} \\ 736 \\ -428 \\ \hline \end{array}$
--	---	---

$\begin{array}{r} \textcircled{0} \textcircled{0} \textcircled{0} \\ 602 \\ -316 \\ \hline \end{array}$	$\begin{array}{r} \textcircled{0} \textcircled{0} \textcircled{0} \\ 231 \\ \quad 98 \\ \hline \end{array}$	$\begin{array}{r} \textcircled{0} \textcircled{0} \textcircled{0} \\ 564 \\ -458 \\ \hline \end{array}$
---	---	---

$\begin{array}{r} \textcircled{0} \textcircled{0} \textcircled{0} \\ 643 \\ -453 \\ \hline \end{array}$	$\begin{array}{r} \textcircled{0} \textcircled{0} \textcircled{0} \\ 245 \\ \quad 86 \\ \hline \end{array}$	$\begin{array}{r} \textcircled{0} \textcircled{0} \textcircled{0} \\ 725 \\ -395 \\ \hline \end{array}$
---	---	---

Adı:  
Soyadı:

Matematik  
3/F Çalışma Kağıdı

Bukalemunlar nasıl renk değiştirirler?

Aşağıdaki toplama işlemlerinde verilmeyen sayıları bulalım

$$\begin{array}{r} 284 \\ +43\Box \\ \hline 723 \end{array}$$

$$\begin{array}{r} 3\Box5 \\ +503 \\ \hline 878 \end{array}$$

$$\begin{array}{r} 468 \\ +\Box57 \\ \hline 725 \end{array}$$

$$\begin{array}{r} 54\Box \\ +392 \\ \hline 941 \end{array}$$

$$\begin{array}{r} \Box47 \\ +256 \\ \hline 903 \end{array}$$

$$\begin{array}{r} 3\Box3 \\ +119 \\ \hline 502 \end{array}$$

$$\begin{array}{r} 5\Box4 \\ +12\Box \\ \hline 720 \end{array}$$

$$\begin{array}{r} \Box37 \\ +4\Box8 \\ \hline 955 \end{array}$$

$$\begin{array}{r} 48\Box \\ +\Box35 \\ \hline 621 \end{array}$$

$$\begin{array}{r} 1\Box6 \\ +\Box52 \\ \hline 648 \end{array}$$

$$\begin{array}{r} \Box83 \\ +29\Box \\ \hline 881 \end{array}$$

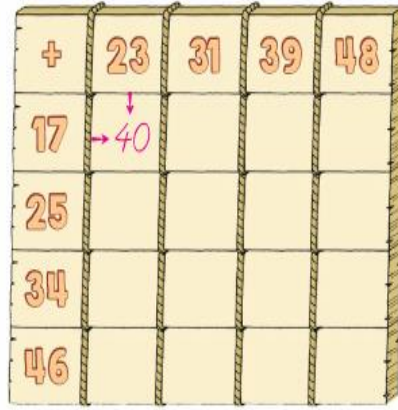

$$\begin{array}{r} \Box14 \\ +4\Box0 \\ \hline 994 \end{array}$$

$$\begin{array}{r} 3\Box9 \\ +434 \\ \hline 763 \end{array}$$

$$\begin{array}{r} 8\Box5 \\ +\Box13 \\ \hline 998 \end{array}$$

$$\begin{array}{r} \Box4\Box \\ +512 \\ \hline 758 \end{array}$$

Zihinden Topla



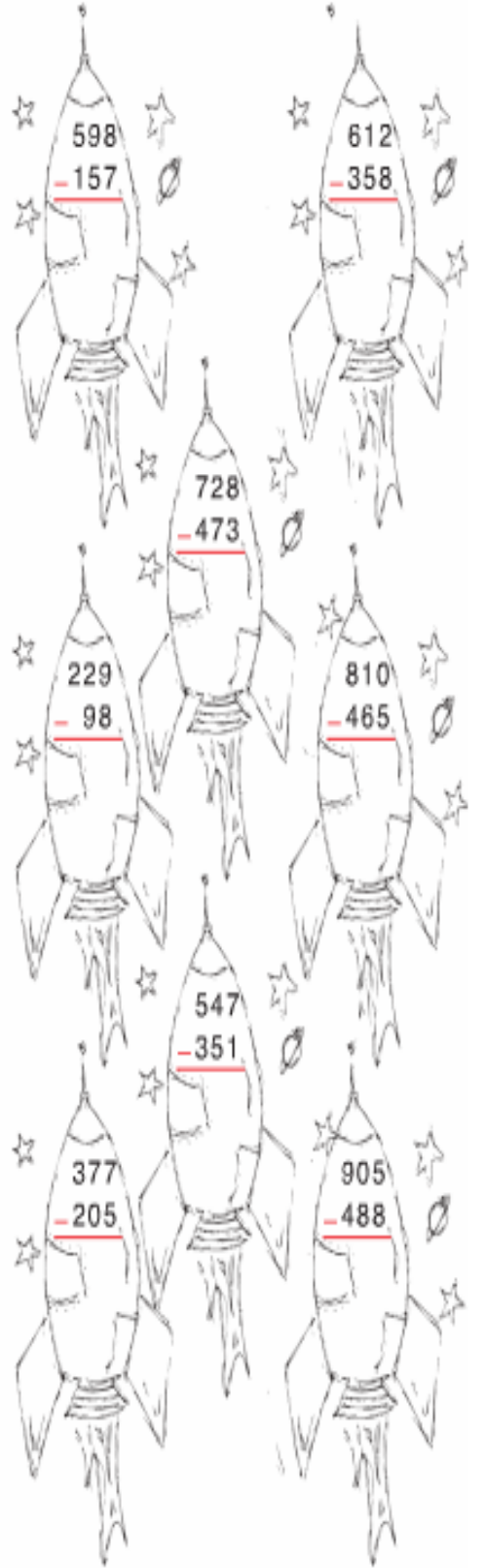
Aşağıdaki toplama işlemlerini zihinden çözelim, sonuçlarını yazalım.

- 26'ya 18 eklersek sonuç kaç olur?
- 35 ile 27'nin toplamı kaçtır?
- 43'ün 16 fazlası kaçtır?
- Tanesi 27 lira olan gömleğin, iki tanesi kaç liradır?
- 59 limon, 25 limon daha kaç limon eder?
- 4 onluk ve 5 birlikten oluşan sayının 25 fazlası kaçtır?
- 62 ile 34'ü toplarsak sonuç kaç olur?
- 19'un 18 fazlası kaçtır?



<input type="text"/>
<input type="text"/>
<input type="text"/>
<input type="text"/>
<input type="text"/>
<input type="text"/>
<input type="text"/>
<input type="text"/>

Roketlerdeki çıkarma işlemlerini yapalım. İşlem sonucuna göre roketleri boyayalım.



Sarı	Mavi	Yeşil	Kırmızı
441	345	254	196
255	172	417	131