

Okuyalım yazalım.

A. Aşağıdaki kelimeleri okuyalım. Hayvan isimlerini bulalım, yazalım.



1.	
2.	
3.	
4.	
5.	



1.	
2.	
3.	
4.	
5.	



1.	
2.	
3.	
4.	
5.	
6.	
7.	



Okuyalım yazalım.

B. Aşağıdaki kelimeleri okuyalım. Meyve – sebze isimlerini bulalım, yazalım.

❖ Vapur

❖ Erik

❖ Soğan

❖ Akrep

❖ Domates

❖ Atlet

❖ Patlıcan

❖ Ispanak

❖ Havuç

❖ Biber

❖ Defter

❖ Kiraz

❖ Kitap

❖ Turp

❖ Brokoli

❖ Güneş

❖ Eşek

❖ Elma

❖ Zil

❖ Kabak

❖ Kivi

❖ Atlet

❖ Patates

❖ Marul

1.

2.

3.

4.

5.



1.

2.

3.

4.

5.




1.

2.

3.

4.

5.



ŐİİRİ EN AZ 3 DEFA OKUALIM.

AY DEDE



Ay dede, ay dede,

Senin evin nerede?

Benim evim iki taŐın arasında.

Bir ekmeęim var,

Yaęa batır, tuza batır,

Sen yemezsen bana getir,

Benim adım kırmızı zambaktır.



Empty box for writing the first line of the poem.

Empty box for writing the second line of the poem.

Empty box for writing the third line of the poem.

Empty box for writing the fourth line of the poem.

Empty box for writing the fifth line of the poem.

Empty box for writing the sixth line of the poem.

Empty box for writing the seventh line of the poem.

Empty box for writing the eighth line of the poem.

HAYVANLAR ALEMİ



.....

.....

.....

.....




.....

.....

.....

.....



.....

.....

.....

.....



.....

.....

.....

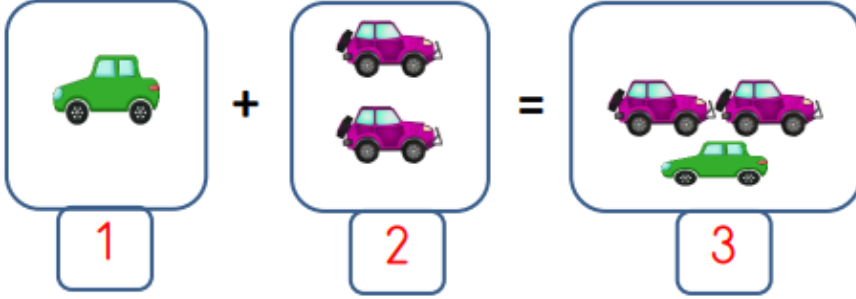
.....

Adı :
Soyadı:

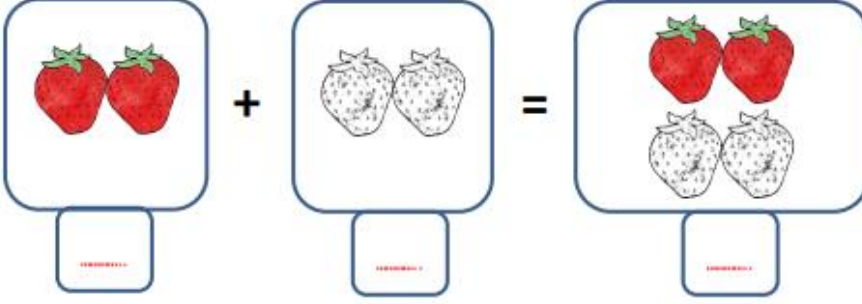
1. Sınıf
Matematik

Toplama İşlemi
Alıştırmalar-1

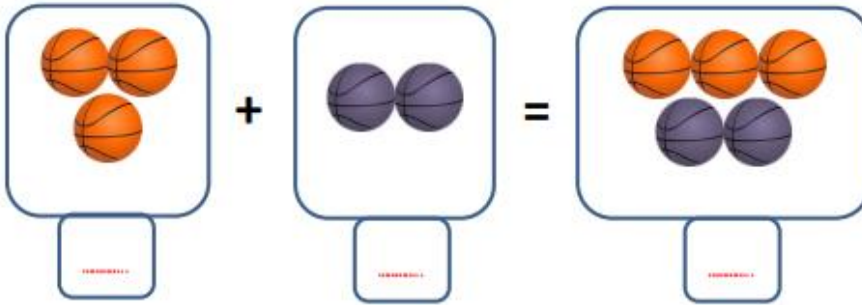
Toplayıp sonucunu yazınız.



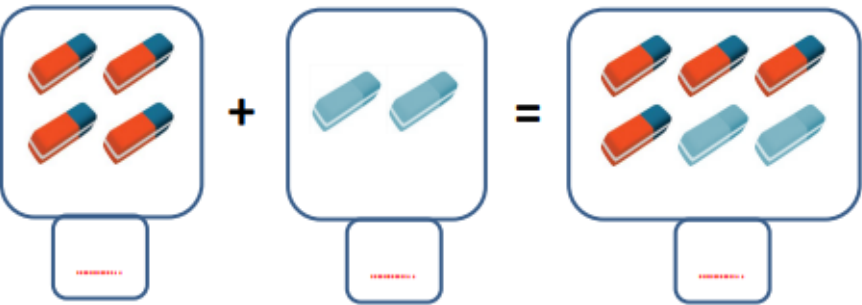
1 + 2 = 3



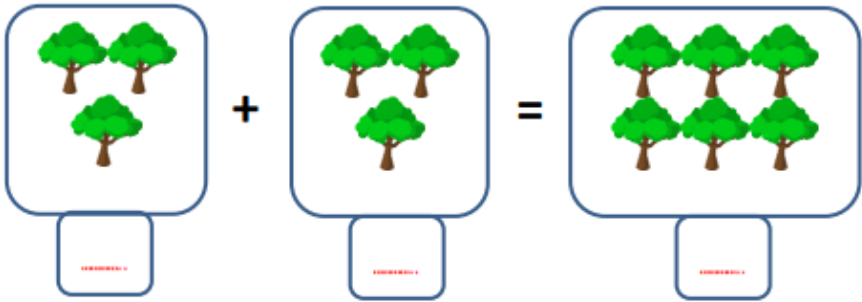
..... + =



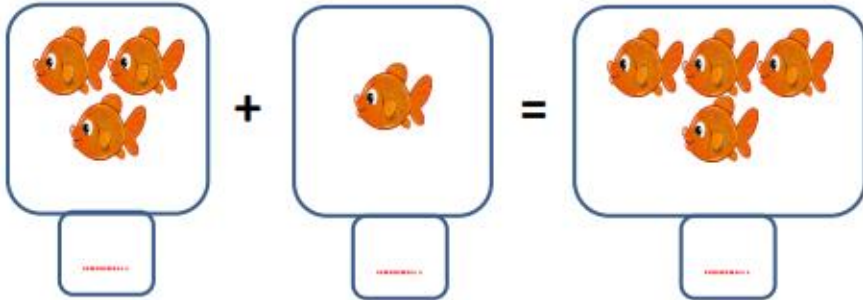
..... + =



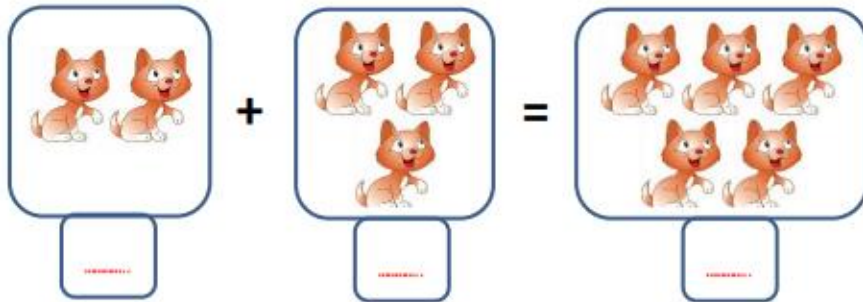
..... + =



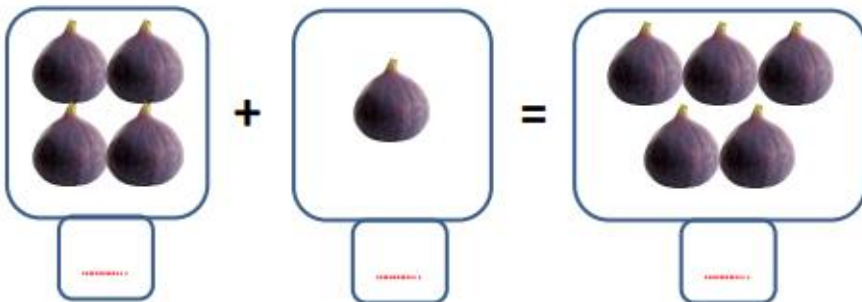
$$\square + \square = \square$$



$$\square + \square = \square$$



$$\square + \square = \square$$



$$\square + \square = \square$$

$$\begin{array}{r} \square \\ 8 \\ + \square \\ \hline \square \end{array}$$
$$\begin{array}{r} \square \\ 10 \\ + \square \\ \hline \square \end{array}$$